



KNEUS

Scholastic Aptitude Test
(KSAT - II)

Syllabus
and
Sample Questions
With
a Model Question Paper

CLASS - L..K.G.



SYLLABUS

ENGLISH

1. Aa to Zz
2. Vowels a, e, i, o, u
3. Odd one out
4. Missing letters
5. Look and write
6. Tell the first letter of the given picture
7. Which picture starts with the given letter

MATHEMATICS






1. Counting 1 to 100
2. Backward counting 10 to 1
3. Number value 1 to 50
4. Number names 1 to 10
5. What comes before, after & in between
6. Shapes
7. Count and write
8. Missing numbers
9. Odd one out
10. Sequencing
11. Pre - Maths concept :
Big- small
Tall - short
Fat- thin
Full- empty
Far - near

GENERAL KNOWLEDGE / SCIENCE / SOCIAL SCIENCE

1. Fruits
2. Vegetables
3. Flowers
4. Domestic animals
5. Wild animals
6. Water animals
7. Parts of the body
8. Helpers
9. Birds
10. Insects
11. Plants
12. Seasons
13. Transport
14. Colours
15. Indoor and Outdoor games
16. Daily activities
17. Food we eat
18. Clothes we wear

19. Things we see :
- In the classroom
 - In the bedroom
 - In the kitchen
 - In the bathroom
 - In the sky
 - In the garden
 - On the road

ENGLISH

- What comes after 'K' ?
(a) J (b) M (c) L (d) T
- What comes before 'S' ?
(a) Q (b) C (c) R (d) U
- What comes between 'J' and 'I' ?
(a) H (b) C (c) F (d) F
- What is the capital letter of 'm' ?
(a) W (b) N (c) K (d) M
- What is the small letter of 'U' ?
(a) n (b) u (c) a (d) r
- What comes after 'Oo' ?
(a) Hh (b) Qq (c) Pp (d) Nn
- What comes before 'Xx' ?
(a) Ww (b) Yy (c) Ss (d) Zz
- What comes between 'Bb' and 'Dd' ?
(a) Ee (b) Aa (c) Gg (d) Cc
- Which picture starts with letter 'U' ?
(a)  (b)  (c)  (d) 
- Which is the correct beginning letter of the picture ? 
(a) F (b) K (c) P (d) M
- Which letter is odd ?
(a) C (b) U (c) F (d) m
- Find the missing letter : P , Q , R, _____, T
(a) C (b) U (c) F (d) S
- Find the odd one ?
(a) AB (b) GH (c) TT (d) QR
- Find the missing letter : m, n, o, _____, q
(a) Ee (b) Aa (c) Gg (d) Cc




15. Find the odd one :

- (a) Bb (b) QQ (c) Ee (d) Nn

16. Find the missing letter : Ee, Ff, _____, Hh, Ii ?

- (a) Gg (b) Jj (c) Kk (d) Oo

17. Which picture does not begin with letter 'B' ?

- (a)  (b)  (c)  (d) 

18. Which of the following is the capital letter ?

- (a) e (b) c (c) L (d) n

19. Which of the following is the small letter?

- (a) r (b) E (c) S (d) Z

20. How many capital letters are there in the word 'PenCiL'?

- (a) 7 (b) 3 (c) 4 (d) 6

21. How many small letters are there in the word 'ALmiRah'?

- (a) 7 (b) 3 (c) 4 (d) 6

22. Find the odd one :

- (a) dd (b) mm (c) tt (d) BB

23. Which of the following is not the capital letter?

- (a) e (b) F (c) A (d) D

24. Which of the following is not the small letter?

- (a) d (b) F (c) u (d) t

25. Which of the following is a vowel ?

- (a) n (b) c (c) s (d) a

26. Which of the following is not a vowel ?

- (a) e (b) s (c) i (d) a

27. Which of the following is correct

- (a) M -  (b) L -  (c) G -  (d) S - 

28. Which pair is correct ?

- (a) D - d (b) R - a (c) M - n (d) none

29. Which pair is incorrect ?

- (a) P - p (b) D - d (c) F - f (d) l - x

30. Which is the vowel in the word ' cap ' ?

- (a) c (b) e (c) a (d) p

31. Which two vowels are there in the word ' heat ' ?

- (a) e,a (b) u,a (c) i,o (d) e,i

32. Which letter is repeated twice in the word ' TALL ' ?

- (a) T (b) L (c) A (d) none of these

33. How many vowels are there in the word 'pause' ?

- (a) 2 (b) 5 (c) 4 (d) 3

34. Which face is happy ?

- (a)  (b)  (c)  (d) 

35. Which of the following is related with reading ?

- (a)  (b)  (c)  (d) 

36. Which of teh following is odd?

- (a) up (b) at (c) am (d) as

37. Which of teh following is related with playing ?

- (a)  (b)  (c)  (d) 

38. Which word starts with vowel 'e' ?

- (a) ant (b) egg (c) owl (d) urn

39. Which of the following is incorrect ?

- (a) G - Gun (b) P-Pen (c) S -Cat (d) L - Log

40. Which word does not starts with vowel 'a ' ?

- (a) ant (b) axe (c) apple (d) ink

41. Which of the following is odd ?

- (a) c (b) e (c) a (d) p

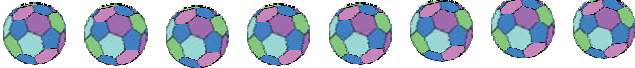





42. How many letters are there in the word ' MANGO ' ?

- (a) 7 (b) 4 (c) 6 (d) 5

43. Which order is incorrect ?
 (a) A,B,C,D (b) U,V,W,X (c) F,J,M,S (d) I,J,K,L
44. Which order is correct ?
 (a) W,X,Y,Z (b) M,N,S,R (c) P,A,B,O (d) G,H,A,K
45. Complete the sequence : A L S , AL ____
 (a) L (b) S (c) A (d) M
46. Complete the given order : AAA, BBB, CCC, _____
 (a) D (b) DD (c) DDD (d) ABC
47. How many vowels are there ?
 (a) 3 (b) 5 (c) 1 (d) 2
48. Which letter is repeated maximum number of times : AXBXCXDXEXFX ?
 (a) B (b) F (c) A (d) X
49. Which formation of the given letters is correct ?
 (a) K (b) d (c) z (d) ə
50. Which formation of the given letters is incorrect ?
 (a) L (b) C (c) Я (d) R

MATHEMATICS

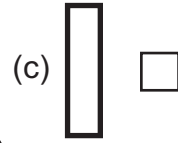
1. Which number comes after 29 ?
 (a) 20 (b) 28 (c) 39 (d) 30
2. What number comes before 75 ?
 (a) 74 (b) 76 (c) 73 (d) 77
3. Which number comes between 84 and 86 ?
 (a) 88 (b) 87 (c) 85 (d) 90
4. Fill the missing number : 34,35,____ 37,38
 (a) 30 (b) 36 (c) 40 (d) 39
5. Find the missing number : 9, 8, 7, 6, ____
 (a) 3 (b) 10 (c) 5 (d) 9
6. Find the odd one :
 (a) 20 (b) 20 (c) 20 (d) 2

7. How do you write 1 in words ?
 (a) one (b) on a (c) oen (d) on
8. Which of the following is teh number name ?
 (a) net (b) ten (c) top (d) none
9. Write 'eight' in numerical.
 (a) 80 (b) 18 (c) 38 (d) 8
10. Which of the following is correct ?
 (a) 3- five (b) 1- ten (c) 2 -two (d) none
11. Which of the following is incorrect ?
 (a) 3- tree (b) 10 - ten (c) 7- seven (d) 4-four
12. Which sequence is correct ?
 (a) 24,10,31 (b) 19,20,21 (c) 5,6,11 (d) none
13. Which sequence is incorrect ?
 (a) 50,51,52 (b) 26.27.28 (c) 32,33,40 (d) 43,44,45
14. Find the incorrect number name ?
 (a) Two (b) Sevn (c) Four (d) All the correct
15. Which of the following is odd ?
 (a) 20-21 (b) 50-51 (c) 70-71 (d) 1-60
16. Which of the following is odd ?
 (a) 1-10 (b) 5-50 (c) 70-71 (d) 60-60
17. Count the balls and tell the correct number.

 (a) 6 (b) 8 (c) 7 (d) 9
18. Find the biggest circle :
 (a)  (b)  (c)  (d) 
19. How may squares are there in the given figure ?

 (a) 4 (b) 6 (c) 8 (d) 7



20. Which of the following is 5 in number ?



21. Which one is odd?



22. Which number is written in square?



23. Which of the following is the circle ?



24. Which one is odd ?



25. What is the shape of the sun ?



26. Which object is rectangle in shape ?



27. Complete the sequence :



28. Which pair is odd ?



29. Find the maximum number of apples .



30. Find the maximum number of ice-creams.



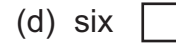
31. Find the odd one:



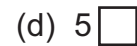

32. In how many balloons number 3 is written ?




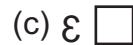
33. Which number name comes after five?



34. Which formation is not correct ?



35. Which formation is correct ?



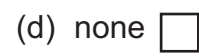
36. Complete the sequence : 1, 10, 1, 10, 1, _____



37. Which object is heavy ?




38. Which is the correct example of big - small?



39. Which glass is empty ?



40. How many flowers are there in the tree ?



General Knowledge & Social Studies

1. Which of the following is a fruit ?



2. Which fruit grows in bunches ?



3. Find the odd one :



4. Which of the following is a vegetable ?



5. Which vegetable can not be used for making salad ?



6. Which fruit is the king of all the fruits ?



7. Which of the following is a flower ?



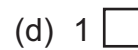

8. Which flower is yellow in colour ?




9. Find the odd one :



10. How many eyes do you have ?



11. How many fingers do you have ?



12. We smell with the help of our :




13. Which part of the body is used for playing football ?

- (a)  (b)  (c)  (d) 

14. Which of the following is a domestic animal ?

- (a)  (b)  (c)  (d) 

15. What do we get from a hen ?

- (a)  (b)  (c)  (d) 



16. Which of the following is a wild animal ?

- (a)  (b)  (c)  (d) 

17. Which animal lives in water ?

- (a)  (b)  (c)  (d) 

18. Which is the biggest land animal on land ?

- (a)  (b)  (c)  (d) 

19. Which animal has a long neck ?

- (a)  (b)  (c)  (d) 

20. Which animal has a long trunk ?

- (a)  (b)  (c)  (d) 

21. Where does a bird live ?

- (a)  (b)  (c)  (d) 



22. Which bird can swim in water ?

- (a)  (b)  (c)  (d) 

23. Which bird is green in colour ?

- (a)  (b)  (c)  (d) 

24. Which of the following is a bird ?

- (a)  (b)  (c)  (d) 

25. How many wheels are there in an auto rickshaw ?

(a) 2

(b) 4

(c) 3

(d) 6

26. Which of the following is a land transport ?

(a) 

(b) 

(c) 

(d) 

27. Which of the following is a water transport ?

(a) 

(b) 

(c) 

(d) 

28. Which of the following is an air transport ?

(a) 

(b) 

(c) 

(d) 

29. Which transport runs on rail ?

(a) 

(b) 

(c) 

(d) 

30. Which animal gives us milk ?

(a) 

(b) 

(c) 

(d) 

31. What is the colour of your hair ?

(a) 

(b) 

(c) 

(d) 

32. Where does a spider live ?

(a) 

(b) 

(c) 

(d) 

33. Which of the following is an insect ?

(a) 

(b) 

(c) 

(d) 

34. Which of the following can be eaten ?

(a) 

(b) 


(c) 

(d) 

35. Which is a healthy food ?

(a) 

(b) 

(c) 

(d) 

36. Which of the following can be drunk in summer season ?

(a) 

(b) 


(c) 

(d) 

37. Which of the following cannot be eaten ?



38. What do we use in summer season ?



39. Which of the following shows a rainy day ?



40. Which dress is for boys ?




41. What do we wear in winter season ?



42. Where do you live ?



43. Which of the following can we get from plants ?



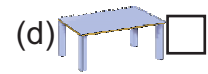
44. Which of the following is not the part of a plant ?



45. Which is an indoor game ?



46. Which of the following is used for playing ?



47. Where do you throw rubbish ?



48. Which of the following is not seen in a garden ?



49. Which of the following is seen on the road ?

- (a)  (b)  (c)  (d) 

50. Which of the following is not seen in a sky ?

- (a)  (b)  (c)  (d) 



51. What do we see in the sky at night ?

- (a)  (b)  (c)  (d) 

52. What do you see in a bathroom ?

- (a)  (b)  (c)  (d) 

53. What do you see in a bedroom ?

- (a)  (b)  (c)  (d) 

54. Which of the following is seen in the kitchen ?

- (a)  (b)  (c)  (d) 

55. Which of the following is odd ?

- (a)  (b)  (c)  (d) 

56. Which of the following is used for sitting ?

- (a)  (b)  (c)  (d) 


57. What do we use for eating noodles ?

- (a)  (b)  (c)  (d) 

58. Which pair is incorrect ?

- (a)  (b)  (c)  (d) 

59. What does a teacher use for teaching ?

- (a)  (b)  (c)  (d) 

60. Which of the following is used for cutting paper ?

- (a)  (b)  (c)  (d) 

Answer - Key

ENGLISH

1. c. 2. c. 3. a. 4. d. 5. b. 6. c. 7. a. 8. d. 9. c.
10. a. 11. d. 12. d. 13. c. 14. c. 15. b. 16. a. 17. b. 18. c.
19. a. 20. b. 21. c. 22. d. 23. a. 24. b. 25. d. 26. b. 27. c.
28. a. 29. d. 30. c. 31. a. 32. b. 33. d. 34. a. 35. c. 36. a.
37. d. 38. b. 39. c. 40. d. 41. c. 42. d. 43. c. 44. a. 45. b.
46. c. 47. b. 48. d. 49. a. 50. c.

MATHEMATICS


1. d. 2. a. 3. c. 4. b. 5. c. 6. d. 7. a. 8. b. 9. d.
10. c. 11. a, 12. b. 13. c. 14. b. 15. d. 16. c. 17. b. 18. c.
19. b. 20. b. 21. c. 22. a. 23. b. 24. b. 25. c. 26. b. 27. c.
28. d. 29. d. 30. d. 31. c. 32. c. 33. d. 34. a. 35. d. 36. c.
37. b. 38. c. 39. a. 40. d.

GENERAL KNOWLEDGE & SOCIAL STUDIES

1. d. 2. a. 3. b. 4. a. 5. d. 6. c. 7. c. 8. a. 9. c.
10. a. 11. c. 12. d. 13. a. 14. b. 15. a. 16. b. 17. b. 18. c.
19. a. 20. b. 21. d. 22. b. 23. b. 24. a. 25. c. 26. d. 27. a.
28. b. 29. c. 30. a. 31. b. 32. c. 33. a. 34. b. 35. b. 36. a.
37. b. 38. c. 39. c. 40. a. 41. d. 42. a. 43. b. 44. d. 45. c.
46. c. 47. b. 48. d. 49. c. 50. a. 51. d. 52. a. 53. b. 54. c.
55. d. 56. b. 57. a. 58. d. 59. b. 60. c.

COLOURING

COLOUR THE GIVEN PICTURE




COLOURING

COLOUR THE GIVEN PICTURE


























COLOURING

COLOUR THE GIVEN PICTURE



MODEL TEST PAPER

1. What comes after 'K' ?
(a) J (b) M (c) L (d) T
2. What is the capital letter of 'm' ?
(a) W (b) N (c) K (d) M
3. Find the missing letter : P , Q , R, _____, T
(a) C (b) U (c) F (d) S
4. Find the missing letter : m, n, o, _____, q
(a) Ee (b) Aa (c) Gg (d) Cc
5. Which of the following is the small letter?
(a) r (b) E (c) S (d) Z
6. Find the odd one :
(a) dd (b) mm (c) tt (d) BB
7. Which of the following is a vowel ?
(a) n (b) c (c) s (d) a
8. Which pair is correct ?
(a) D - d (b) R - a (c) M - n (d) none
9. Which pair is incorrect ?
(a) P - p (b) D - d (c) F - f (d) l - x
10. Which letter is repeated twice in the word ' TALL' ?
(a) T (b) L (c) A (d) none of these
11. Which of the following is related with reading ?
(a)  (b)  (c)  (d) 
12. Which of the following is incorrect ?
(a) G - Gun (b) P-Pen (c) S -Cat (d) L - Log
13. How many letters are there in the word ' MANGO'
(a) 7 (b) 4 (c) 6 (d) 5
14. How many vowels are there ?
(a) 3 (b) 5 (c) 1 (d) 2

15. What number comes before 75 ?
 (a) 74 (b) 76 (c) 73 (d) 77
16. Find the odd one :
 (a) 20 (b) 20 (c) 20 (d) 2
17. How do you write 1 in words ?
 (a) one (b) on a (c) oen (d) on
18. Which of the following is teh number name ?
 (a) net (b) ten (c) top (d) none
19. Which of the following is incorrect ?
 (a) 3- tree (b) 10 - ten (c) 7- seven (d) 4-four
20. Which sequence is incorrect ?
 (a) 50,51,52 (b) 26.27.28 (c) 32,33,40 (d) 43,44,45
21. Which of the following is odd ?
 (a) 20-21 (b) 50-51 (c) 70-71 (d) 1-60
22. Find the biggest circle :
 (a)  (b)  (c)  (d) 
23. Which of the following is 5 in number ?
 (a) 
 (c) 
 (b) 
 (d) 
24. Which one is odd?
 (a)  (b)  (c)  (d) 
25. Complete the sequence :  
 (a)  (b)  (c)   (d) 
26. Which formation is not correct ?
 (a) 4 (b) 7 (c) 6 (d) 5

27. Which object is heavy ?



28. Which glass is empty ?



29. Which of the following is a fruit ?



30. Find the odd one :



31. Which vegetable can not be used for making salad ?



32. Which fruit is the king of all the fruits ?



33. How many fingers do you have ?



34. We smell with the help of our :



35. Which is the biggest land animal on land ?



36. Which animal has a long trunk ?



37. Which of the following is a water transport ?



38. Which animal gives us milk ?



39. Which of the following is seen on the road ?



40. What do you see in a bathroom ?



COLOURING

COLOUR THE GIVEN PICTURE



KNEUS SCHOLASTIC APTITUDE TEST CLASS - LKG
MODEL QUESTION PAPER

KINDLY FOLLOW THE INSTRUCTIONS

- Exam supervisor, kindly verify the roll number of the student before distributing the answer book.
- This question paper contains 40 questions and a picture to be coloured. Each question is followed by a series of choices or possible answers.
- All questions carry equal marks except the colouring which carries 10 marks.
- Try to answer every question. Your test score will be based on the number of questions you answer correctly. There is no negative marking for wrong answers.
- The students shall tick the appropriate box given near the choice of answers in the answer sheet. You may use either blue or black pen for ticking.
- Tick only one answer for each question. Double answers are scored as wrong answers.
- Keep your answer sheets on a hard surface while answering. Do not fold or crease your answer sheet.
- Do not scribble on the answer book. For rough work use the plain sheet given at the end of the book.
- When you finish your test, time permitting, you may re check your work.
- Colouring has to be done using colouring pencils alone

Q. I a student.

- A. am
C. is
B. are
D. can

The students shall tick ✓ on the box for their answer

HONOUR PLEDGE FOR THIS TEST:

After you have finished the exam, please read the following statement and sign your name below it.

I promise that I did not discuss any aspect of this exam with anyone other than the instructor, that I neither gave or received any unauthorized assistance on this exam, and that the work presented herein is entirely my own.

(Signature)